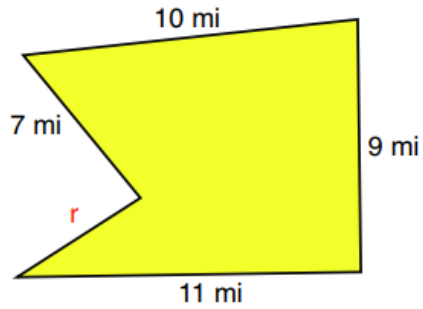
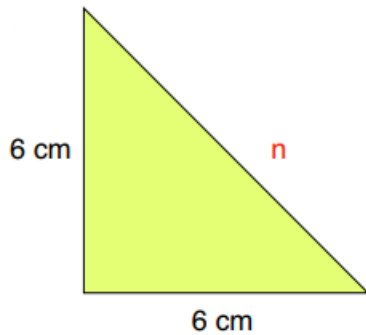


POLYGON	SHOW YOUR WORK
----------------	-----------------------



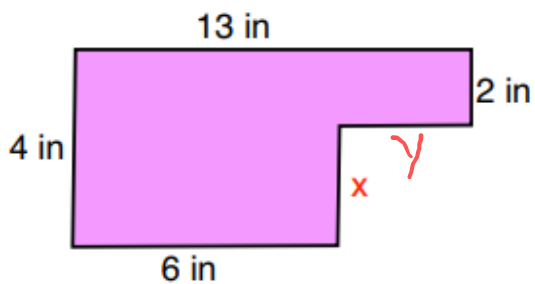
Perimeter = 42 mi

$r = \underline{\hspace{2cm}} \text{ mi}$



Perimeter = 18 cm

$n = \underline{\hspace{2cm}} \text{ cm}$



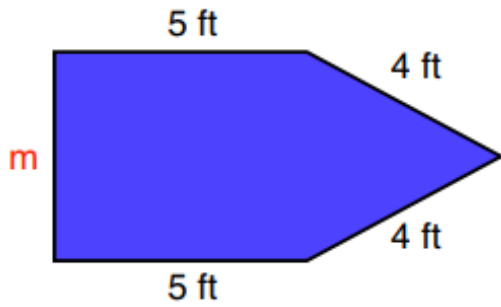
Perimeter = ~~28 in~~ 34 in.

$y = \underline{\hspace{2cm}} \text{ in.}$

$x = \underline{\hspace{2cm}} \text{ in}$

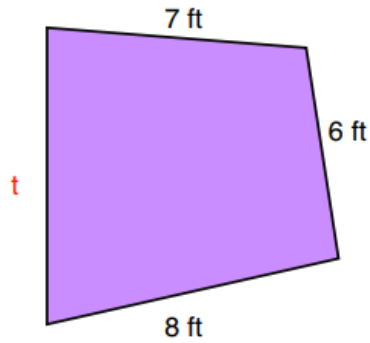
POLYGON

SHOW YOUR WORK



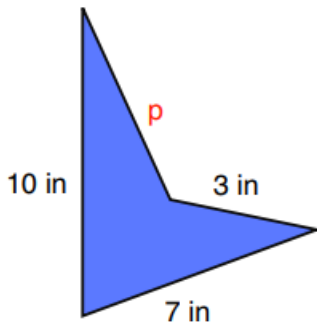
$$\text{Perimeter} = 22 \text{ ft}$$

$$m = \underline{\hspace{2cm}} \text{ ft}$$



$$\text{Perimeter} = 32 \text{ ft}$$

$$t = \underline{\hspace{2cm}} \text{ ft}$$



$$\text{Perimeter} = 26 \text{ in}$$

$$p = \underline{\hspace{2cm}} \text{ in}$$